

Maths Challenge

Monday - Add by making ten

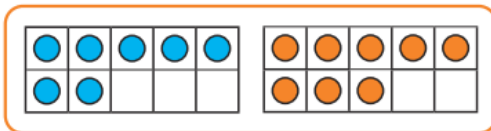
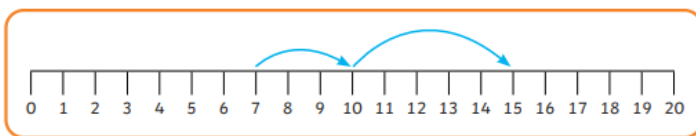
Problem 1

Add by Making 10



Theo has 7 stickers. His friend gives him 8 more.

Tick the ways that use making 10 to help him work out how many stickers he has.

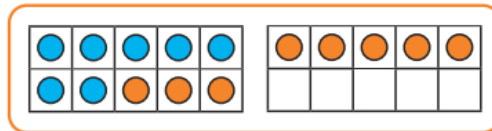


$$7 + 8$$

A tree diagram for the equation $7 + 8$. The number 7 is on the left, and 8 is on the right. They both branch down to the number 3. From the 3, a line goes up to the number 8, which then branches to 5 and 3.

$$7 + 8$$

A tree diagram for the equation $7 + 8$. The number 7 is on the left, and 8 is on the right. They both branch down to the number 2. From the 2, a line goes up to the number 8, which then branches to 6 and 2.



Make your own word problem to go with this ten-frame:

